

Maihefte

1. Sudoku

| | | | | | |
|---|---|---|---|---|---|
| 5 | | | | | |
| 2 | | 5 | | 1 | |
| | 4 | 2 | | | |
| | | | 2 | 6 | |
| | 1 | | 3 | | 2 |
| | | | | | 3 |

| | | | | | |
|---|---|---|--|---|---|
| 4 | 6 | | | | |
| | | 4 | | 6 | |
| 2 | 1 | | | 3 | 4 |
| | | | | 5 | |
| 3 | | 5 | | | |
| | | | | 1 | 3 |

| | | | | | |
|---|---|---|---|---|---|
| 1 | | | | 6 | |
| | | | 4 | 5 | |
| 6 | | | 1 | | |
| | | 2 | | | 4 |
| | 6 | 1 | | | |
| | 1 | | | | 6 |

| | | | | | |
|---|---|---|---|---|---|
| 4 | 5 | | | | |
| | | 4 | 1 | 6 | |
| | 1 | | | 3 | |
| | | | | | |
| | | 5 | | | 6 |
| | | | | 1 | 3 |

| | | | | | |
|--|---|---|---|---|---|
| | 1 | 3 | 5 | 6 | |
| | 5 | | | | |
| | 3 | 6 | 2 | | 1 |
| | | 2 | | | 6 |
| | | | 4 | 3 | |
| | 2 | 1 | | | 5 |

| | | | | | |
|---|---|---|---|---|---|
| | 1 | | 4 | 5 | |
| 5 | 6 | | | | |
| 3 | | | | | 1 |
| | | | | 3 | |
| | 5 | | | | 6 |
| | | 1 | | 4 | |



Maihefte

2. Sudoku

| | | | | | |
|--|---|---|---|---|---|
| | 1 | 3 | 5 | 6 | |
| | 5 | | | | |
| | 3 | 6 | 2 | | 1 |
| | | 2 | | | 6 |
| | | | 4 | 3 | |
| | 2 | 1 | | | 5 |

| | | | | | |
|---|---|---|---|---|---|
| | 1 | | 4 | 5 | |
| 5 | 6 | | | | |
| 3 | | | | | 1 |
| | | | | 3 | |
| | 5 | | | | 6 |
| | | 1 | | 4 | |

| | | | | | |
|---|---|---|---|---|---|
| 4 | 5 | | | | |
| | | 4 | 1 | 6 | |
| | 1 | | | 3 | |
| | | | | | |
| | | 5 | | | 6 |
| | | | | 1 | 3 |

| | | | | | |
|---|---|---|---|---|---|
| 4 | 6 | | 3 | | |
| | | 4 | 2 | 6 | |
| 2 | | | | | 4 |
| 6 | | | | | |
| | | 5 | | | |
| | | | | 1 | 3 |

| | | | | | |
|---|---|---|--|---|---|
| 4 | 6 | | | | |
| | | 4 | | 6 | |
| 2 | 1 | | | 3 | 4 |
| | | | | 5 | |
| 3 | | 5 | | | |
| | | | | 1 | 3 |

| | | | | | |
|---|---|---|---|---|---|
| 5 | | | | | |
| 2 | | 5 | | 1 | |
| | 4 | 2 | | | |
| | | | 2 | 6 | |
| | 1 | | 3 | | 2 |
| | | | | | 3 |



Maihefte

1. Skriv tallet før og etter

| | | |
|---|--|---|
| 3 | | 5 |
|---|--|---|

| | | |
|---|--|----|
| 8 | | 10 |
|---|--|----|

| | | |
|--|---|--|
| | 8 | |
|--|---|--|

| | | |
|--|---|--|
| | 4 | |
|--|---|--|

| | | |
|---|--|---|
| 5 | | 7 |
|---|--|---|

| | | |
|--|---|--|
| | 6 | |
|--|---|--|

| | | |
|--|---|--|
| | 9 | |
|--|---|--|

| | | |
|---|--|---|
| 6 | | 8 |
|---|--|---|

| | | |
|--|---|--|
| | 7 | |
|--|---|--|

| | | |
|---|--|---|
| 7 | | 9 |
|---|--|---|

| | | |
|---|--|---|
| 3 | | 5 |
|---|--|---|

| | | |
|--|---|--|
| | 1 | |
|--|---|--|

| | | |
|---|--|---|
| 4 | | 6 |
|---|--|---|

| | | |
|---|--|---|
| 6 | | 8 |
|---|--|---|

| | | |
|--|---|--|
| | 2 | |
|--|---|--|

| | | |
|--|---|--|
| | 5 | |
|--|---|--|

| | | |
|--|---|--|
| | 5 | |
|--|---|--|

| | | |
|--|---|--|
| | 6 | |
|--|---|--|

| | | |
|--|---|--|
| | 8 | |
|--|---|--|

| | | |
|--|---|--|
| | 9 | |
|--|---|--|

| | | |
|---|--|---|
| 6 | | 8 |
|---|--|---|

| | | |
|--|---|--|
| | 1 | |
|--|---|--|

| | | |
|--|---|--|
| | 9 | |
|--|---|--|

| | | |
|--|---|--|
| | 9 | |
|--|---|--|

| | | |
|---|--|---|
| 1 | | 3 |
|---|--|---|

| | | |
|---|--|---|
| 3 | | 5 |
|---|--|---|

| | | |
|---|--|----|
| 8 | | 10 |
|---|--|----|

| | | |
|---|--|---|
| 3 | | 5 |
|---|--|---|

| | | |
|---|--|---|
| 7 | | 9 |
|---|--|---|

| | | |
|---|--|---|
| 4 | | 6 |
|---|--|---|

| | | |
|---|--|---|
| 2 | | 4 |
|---|--|---|

| | | |
|---|--|---|
| 5 | | 7 |
|---|--|---|

| | | |
|--|---|--|
| | 9 | |
|--|---|--|

| | | |
|---|--|---|
| 5 | | 7 |
|---|--|---|

| | | |
|--|---|--|
| | 2 | |
|--|---|--|

| | | |
|---|--|---|
| 2 | | 4 |
|---|--|---|



Maihefte

2. Skriv tallet før og etter

| | | |
|---|--|---|
| 7 | | 9 |
|---|--|---|

| | | |
|---|--|---|
| 2 | | 4 |
|---|--|---|

| | | |
|---|--|---|
| 4 | | 6 |
|---|--|---|

| | | |
|---|--|---|
| 1 | | 3 |
|---|--|---|

| | | |
|---|--|----|
| 8 | | 10 |
|---|--|----|

| | | |
|--|---|--|
| | 4 | |
|--|---|--|

| | | |
|---|--|---|
| 3 | | 5 |
|---|--|---|

| | | |
|--|---|--|
| | 9 | |
|--|---|--|

| | | |
|---|--|---|
| 3 | | 5 |
|---|--|---|

| | | |
|---|--|----|
| 8 | | 10 |
|---|--|----|

| | | |
|---|--|---|
| 4 | | 6 |
|---|--|---|

| | | |
|---|--|---|
| 2 | | 4 |
|---|--|---|

| | | |
|---|--|----|
| 8 | | 10 |
|---|--|----|

| | | |
|---|--|---|
| 1 | | 3 |
|---|--|---|

| | | |
|---|--|----|
| 8 | | 10 |
|---|--|----|

| | | |
|--|---|--|
| | 8 | |
|--|---|--|

| | | |
|---|--|---|
| 4 | | 6 |
|---|--|---|

| | | |
|--|---|--|
| | 4 | |
|--|---|--|

| | | |
|--|---|--|
| | 1 | |
|--|---|--|

| | | |
|--|---|--|
| | 2 | |
|--|---|--|

| | | |
|---|--|---|
| 3 | | 5 |
|---|--|---|

| | | |
|---|--|---|
| 5 | | 7 |
|---|--|---|

| | | |
|--|---|--|
| | 3 | |
|--|---|--|

| | | |
|---|--|---|
| 0 | | 2 |
|---|--|---|

| | | |
|---|--|----|
| 8 | | 10 |
|---|--|----|

| | | |
|---|--|---|
| 0 | | 2 |
|---|--|---|

| | | |
|---|--|---|
| 6 | | 8 |
|---|--|---|

| | | |
|--|---|--|
| | 7 | |
|--|---|--|

| | | |
|---|--|----|
| 8 | | 10 |
|---|--|----|

| | | |
|---|--|---|
| 3 | | 5 |
|---|--|---|

| | | |
|--|---|--|
| | 6 | |
|--|---|--|

| | | |
|--|---|--|
| | 1 | |
|--|---|--|

| | | |
|--|---|--|
| | 6 | |
|--|---|--|

| | | |
|---|--|---|
| 1 | | 3 |
|---|--|---|

| | | |
|--|---|--|
| | 6 | |
|--|---|--|

| | | |
|--|---|--|
| | 7 | |
|--|---|--|



Maihefte

1. Skriv tallet før og etter

| | | |
|----|--|----|
| 12 | | 14 |
|----|--|----|

| | | |
|--|---|--|
| | 6 | |
|--|---|--|

| | | |
|--|----|--|
| | 13 | |
|--|----|--|

| | | |
|--|----|--|
| | 16 | |
|--|----|--|

| | | |
|---|--|----|
| 8 | | 10 |
|---|--|----|

| | | |
|----|--|----|
| 15 | | 17 |
|----|--|----|

| | | |
|--|----|--|
| | 11 | |
|--|----|--|

| | | |
|--|----|--|
| | 14 | |
|--|----|--|

| | | |
|--|----|--|
| | 13 | |
|--|----|--|

| | | |
|----|--|----|
| 18 | | 20 |
|----|--|----|

| | | |
|--|----|--|
| | 19 | |
|--|----|--|

| | | |
|----|--|----|
| 11 | | 13 |
|----|--|----|

| | | |
|---|--|---|
| 4 | | 6 |
|---|--|---|

| | | |
|--|---|--|
| | 7 | |
|--|---|--|

| | | |
|--|----|--|
| | 16 | |
|--|----|--|

| | | |
|--|----|--|
| | 11 | |
|--|----|--|

| | | |
|--|----|--|
| | 19 | |
|--|----|--|

| | | |
|----|--|----|
| 10 | | 12 |
|----|--|----|

| | | |
|--|---|--|
| | 5 | |
|--|---|--|

| | | |
|--|---|--|
| | 9 | |
|--|---|--|

| | | |
|---|--|----|
| 8 | | 10 |
|---|--|----|

| | | |
|----|--|----|
| 18 | | 20 |
|----|--|----|

| | | |
|--|---|--|
| | 9 | |
|--|---|--|

| | | |
|--|---|--|
| | 9 | |
|--|---|--|

| | | |
|--|----|--|
| | 14 | |
|--|----|--|

| | | |
|--|----|--|
| | 14 | |
|--|----|--|

| | | |
|--|----|--|
| | 17 | |
|--|----|--|

| | | |
|----|--|----|
| 13 | | 15 |
|----|--|----|

| | | |
|--|---|--|
| | 6 | |
|--|---|--|

| | | |
|----|--|----|
| 12 | | 14 |
|----|--|----|

| | | |
|--|---|--|
| | 8 | |
|--|---|--|

| | | |
|----|--|----|
| 17 | | 19 |
|----|--|----|

| | | |
|---|--|----|
| 8 | | 10 |
|---|--|----|

| | | |
|--|----|--|
| | 11 | |
|--|----|--|

| | | |
|--|----|--|
| | 18 | |
|--|----|--|

| | | |
|----|--|----|
| 13 | | 15 |
|----|--|----|



Maihefte

2. Skriv tallet før og etter

| | | |
|----|--|----|
| 11 | | 13 |
|----|--|----|

| | | |
|---|--|----|
| 8 | | 10 |
|---|--|----|

| | | |
|--|----|--|
| | 10 | |
|--|----|--|

| | | |
|--|----|--|
| | 10 | |
|--|----|--|

| | | |
|--|----|--|
| | 13 | |
|--|----|--|

| | | |
|--|----|--|
| | 13 | |
|--|----|--|

| | | |
|--|---|--|
| | 9 | |
|--|---|--|

| | | |
|----|--|----|
| 10 | | 12 |
|----|--|----|

| | | |
|----|--|----|
| 18 | | 20 |
|----|--|----|

| | | |
|--|----|--|
| | 15 | |
|--|----|--|

| | | |
|--|---|--|
| | 6 | |
|--|---|--|

| | | |
|----|--|----|
| 15 | | 17 |
|----|--|----|

| | | |
|--|---|--|
| | 5 | |
|--|---|--|

| | | |
|----|--|----|
| 14 | | 16 |
|----|--|----|

| | | |
|--|---|--|
| | 5 | |
|--|---|--|

| | | |
|----|--|----|
| 14 | | 16 |
|----|--|----|

| | | |
|--|---|--|
| | 6 | |
|--|---|--|

| | | |
|--|----|--|
| | 17 | |
|--|----|--|

| | | |
|----|--|----|
| 16 | | 18 |
|----|--|----|

| | | |
|----|--|----|
| 10 | | 12 |
|----|--|----|

| | | |
|--|----|--|
| | 19 | |
|--|----|--|

| | | |
|----|--|----|
| 12 | | 14 |
|----|--|----|

| | | |
|----|--|----|
| 16 | | 18 |
|----|--|----|

| | | |
|--|---|--|
| | 5 | |
|--|---|--|

| | | |
|----|--|----|
| 17 | | 19 |
|----|--|----|

| | | |
|---|--|----|
| 8 | | 10 |
|---|--|----|

| | | |
|--|---|--|
| | 6 | |
|--|---|--|

| | | |
|--|----|--|
| | 11 | |
|--|----|--|

| | | |
|----|--|----|
| 14 | | 16 |
|----|--|----|

| | | |
|--|---|--|
| | 7 | |
|--|---|--|

| | | |
|--|---|--|
| | 7 | |
|--|---|--|

| | | |
|----|--|----|
| 18 | | 20 |
|----|--|----|

| | | |
|----|--|----|
| 15 | | 17 |
|----|--|----|

| | | |
|----|--|----|
| 14 | | 16 |
|----|--|----|

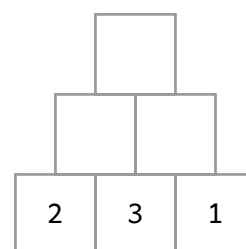
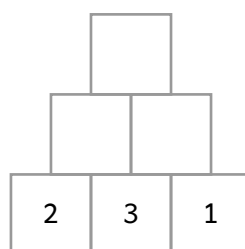
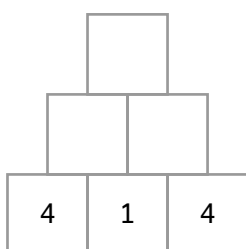
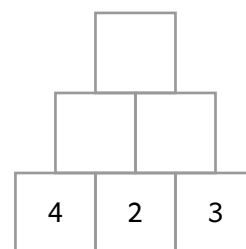
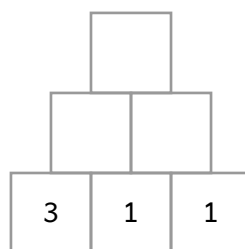
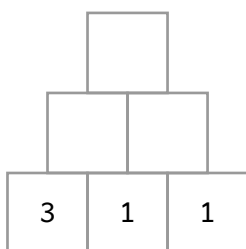
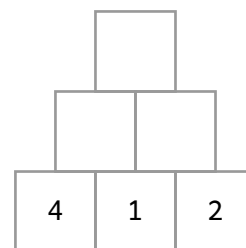
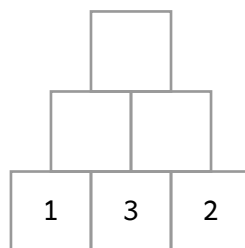
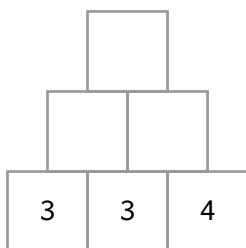
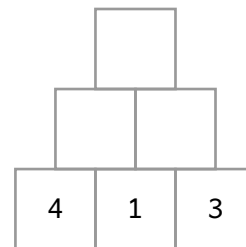
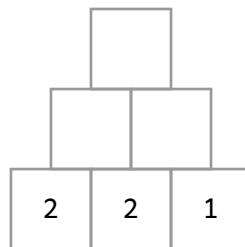
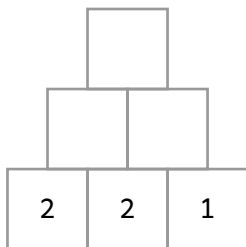
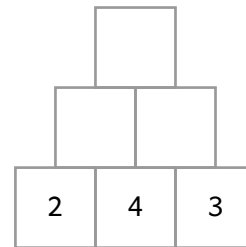
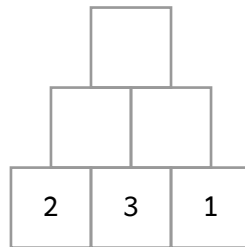
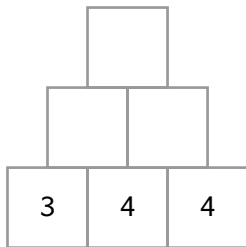
| | | |
|---|--|----|
| 9 | | 11 |
|---|--|----|

| | | |
|---|--|---|
| 4 | | 6 |
|---|--|---|



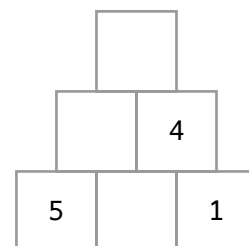
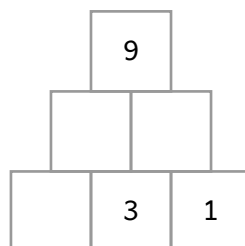
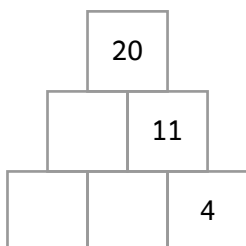
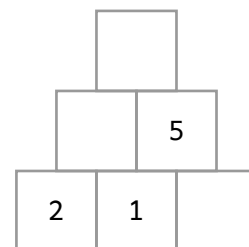
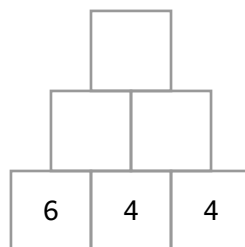
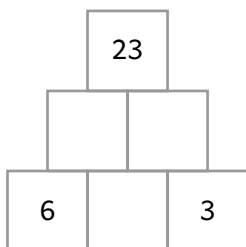
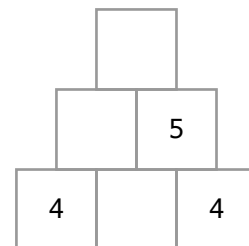
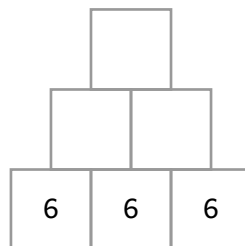
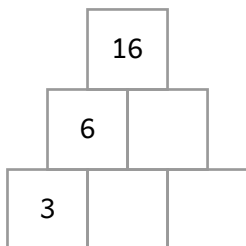
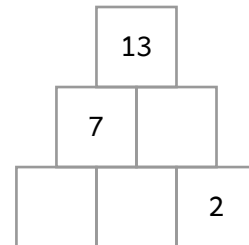
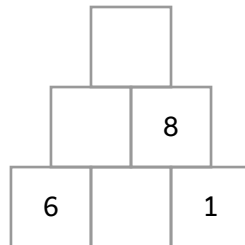
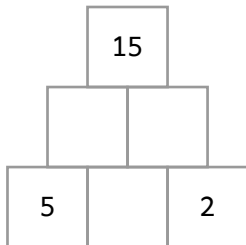
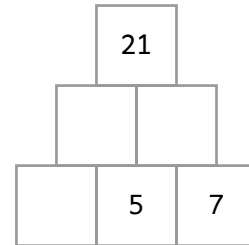
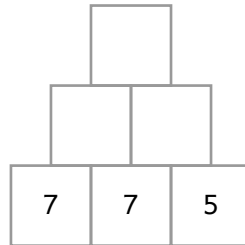
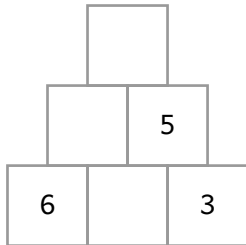
Maihefte

2. Pyramide



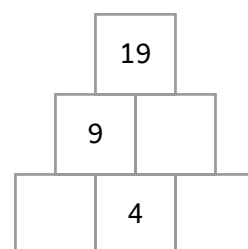
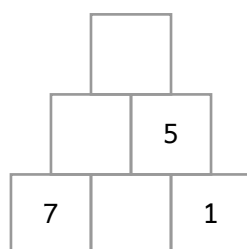
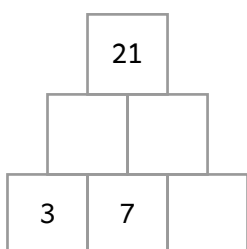
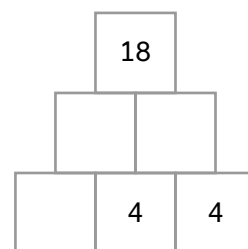
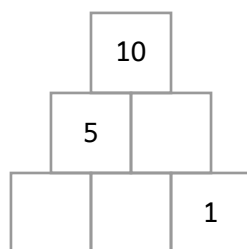
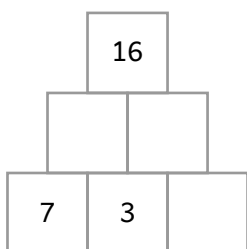
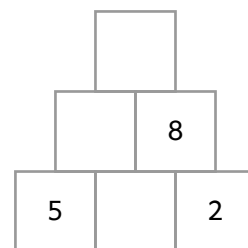
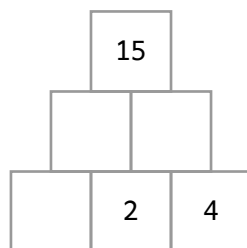
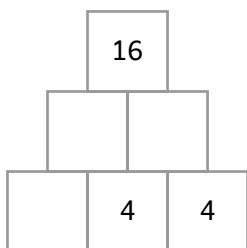
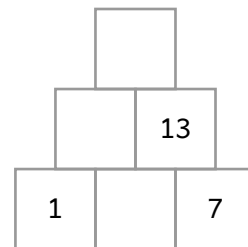
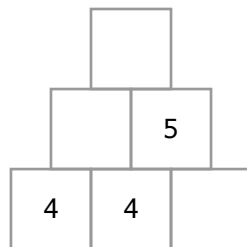
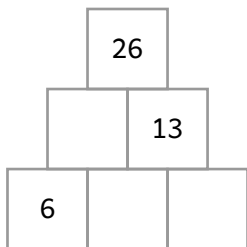
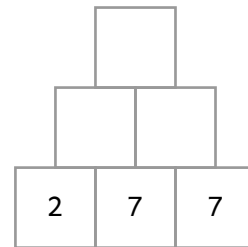
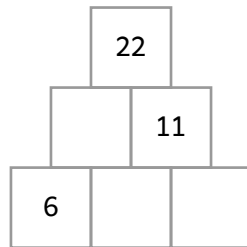
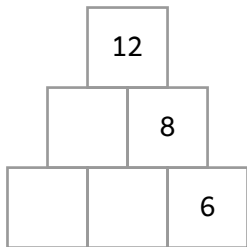
Maihefte

1. Pyramide



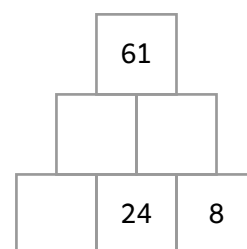
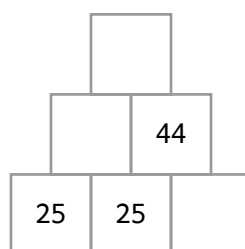
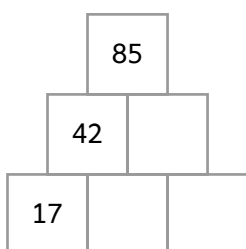
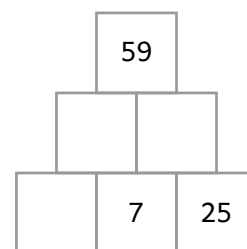
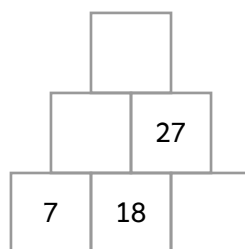
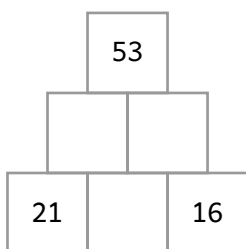
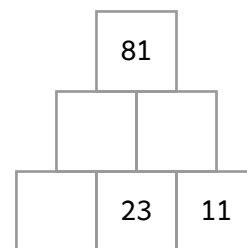
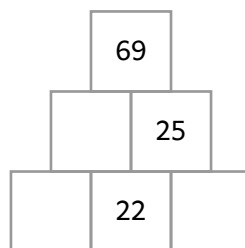
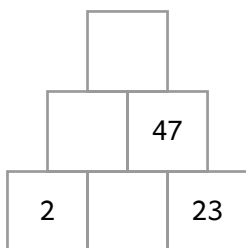
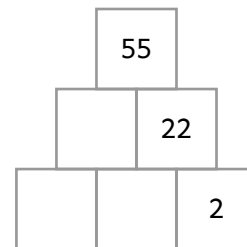
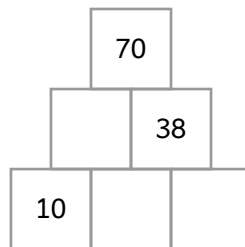
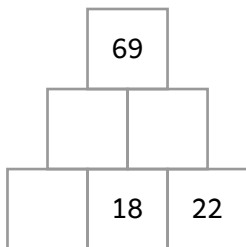
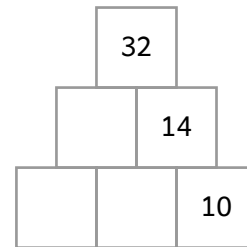
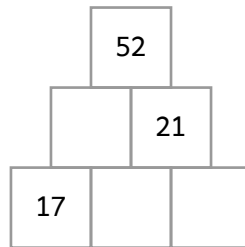
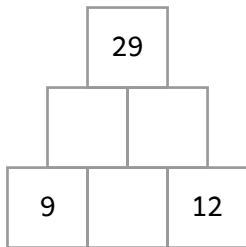
Maihefte

2. Pyramide



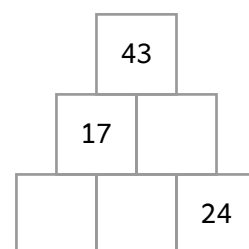
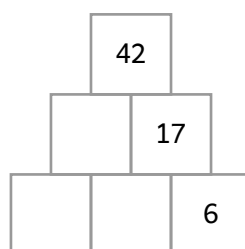
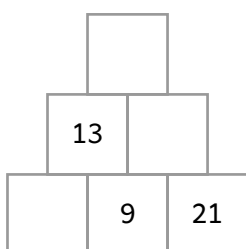
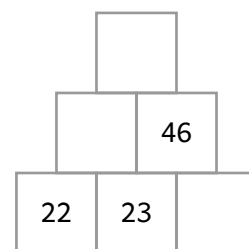
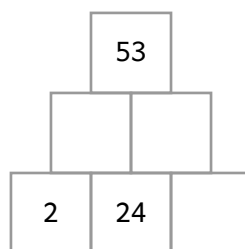
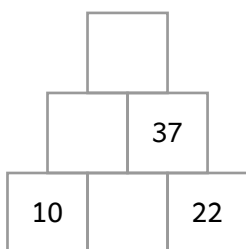
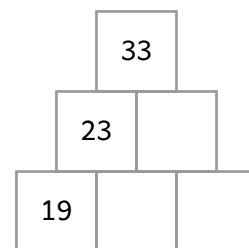
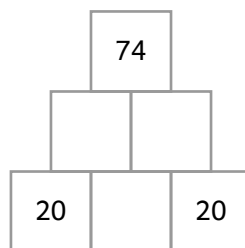
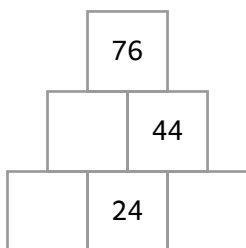
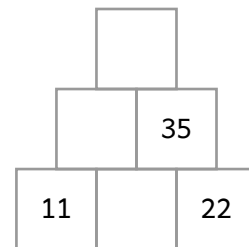
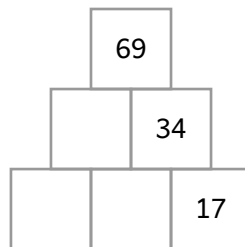
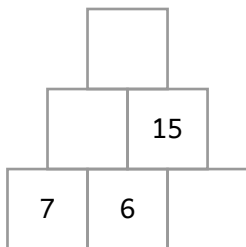
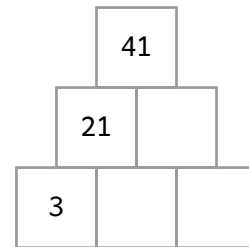
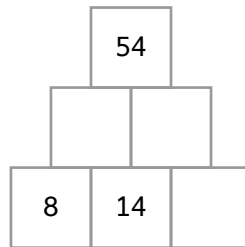
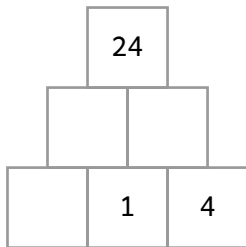
Maihefte

1. Pyramide



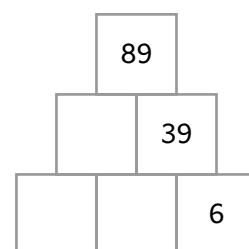
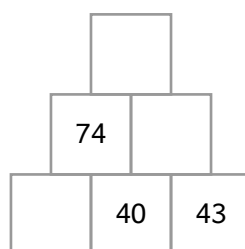
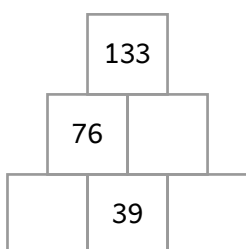
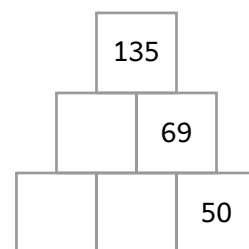
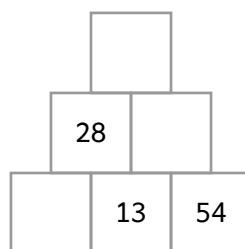
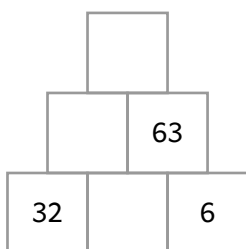
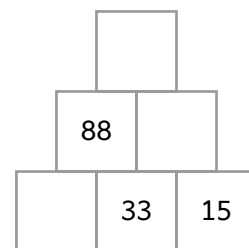
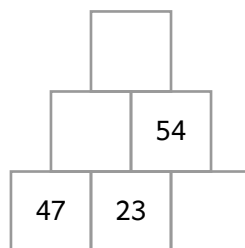
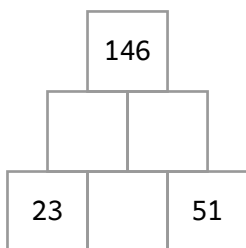
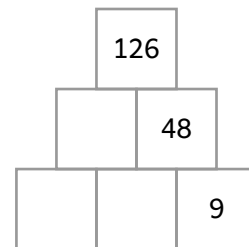
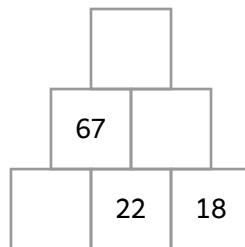
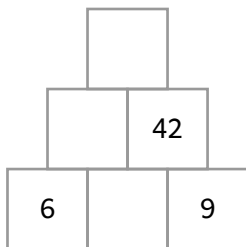
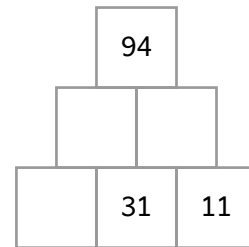
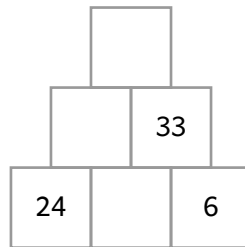
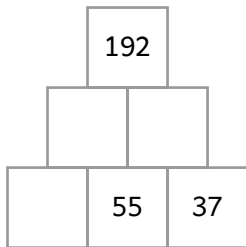
Maihefte

2. Pyramide



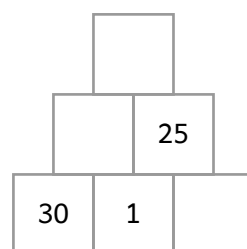
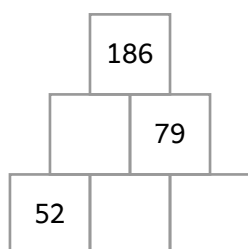
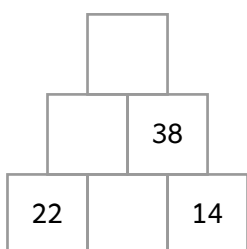
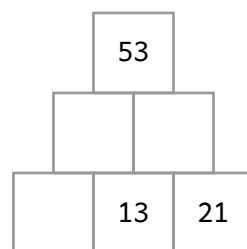
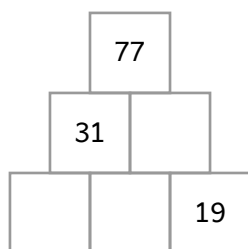
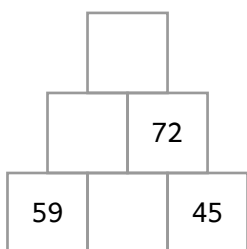
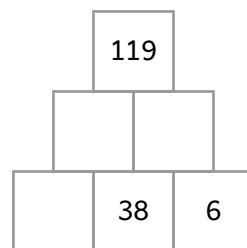
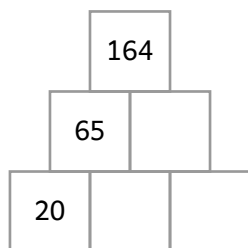
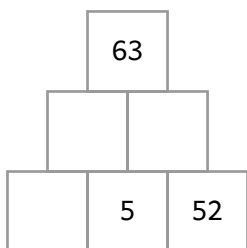
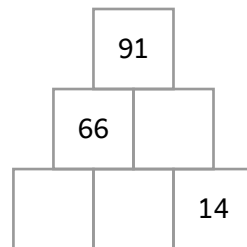
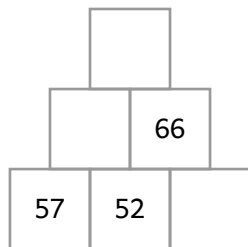
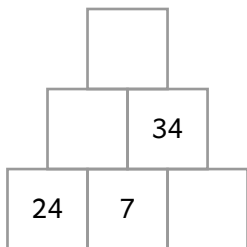
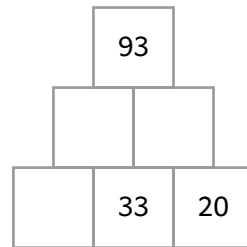
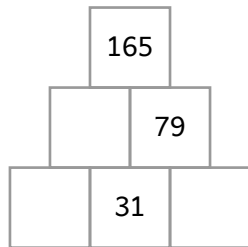
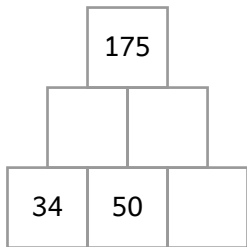
Maihefte

1. Pyramide



Maihefte

2. Pyramide



Maihefte

1. Fyll inn tallene som mangler

| | | | | | | | | | |
|----|----|----|----|----|----|----|----|----|----|
| | | | | 5 | 6 | 7 | 8 | | 10 |
| 11 | | 13 | 14 | 15 | | 17 | 18 | | |
| | 22 | | 24 | | | | 28 | | 30 |
| | | 33 | | 35 | | | | | |
| 41 | 42 | | 44 | | 46 | | | 49 | |
| | | 53 | | | | | 58 | | 60 |
| 61 | | 63 | 64 | | 66 | | 68 | 69 | |
| | | | | 75 | 76 | | 78 | 79 | |
| | 82 | | | 85 | | 87 | | | 90 |
| | | | | | | | 98 | | |



Maihefte

2. Fyll inn tallene som mangler

| | | | | | | | | | |
|----|----|----|----|----|----|----|----|----|----|
| | | | 4 | 5 | 6 | | 8 | | |
| | 12 | 13 | | 15 | 16 | 17 | | 19 | |
| | | | | 25 | | 27 | | 29 | |
| | | 33 | 34 | | 36 | | | 39 | 40 |
| | | 43 | | 45 | 46 | | | | 50 |
| | | | | 55 | 56 | | 58 | 59 | 60 |
| | | 63 | | | | | | | |
| | | 73 | 74 | | | 77 | 78 | 79 | |
| 81 | 82 | | | | | | 88 | | 90 |
| | 92 | | | | 96 | 97 | | | |



Maihefte

1. Regn ut og fargelegg

| | | | | |
|--------|--------|--------|--------|--------|
| 15 - 5 | 17 - 6 | 16 - 5 | 18 - 7 | 15 - 5 |
| 14 - 3 | 18 - 8 | 18 - 7 | 14 - 4 | 14 - 3 |
| 13 - 2 | 18 - 7 | 18 - 8 | 18 - 7 | 16 - 5 |
| 18 - 5 | 16 - 2 | 16 - 3 | 17 - 3 | 19 - 6 |
| 13 - 1 | 19 - 5 | 17 - 4 | 17 - 3 | 13 - 1 |

Blå [10]
Rosa [11]
Lilla [12]
Oransje [13]
Grønn [14]

| | | | | |
|--------|--------|--------|--------|--------|
| 21 + 4 | 27 - 4 | 23 + 1 | 20 + 2 | 27 - 1 |
| 26 - 3 | 29 - 5 | 28 - 4 | 25 - 1 | 26 - 3 |
| 22 + 2 | 21 + 3 | 28 - 2 | 23 + 1 | 23 + 1 |
| 25 - 2 | 21 + 3 | 23 + 1 | 29 - 5 | 21 + 1 |
| 22 + 4 | 27 - 4 | 27 - 3 | 25 - 2 | 22 + 3 |

Blå [22]
Rosa [23]
Lilla [24]
Oransje [25]
Grønn [26]

| | | | | |
|--------|--------|--------|--------|--------|
| 23 - 3 | 11 + 6 | 24 - 3 | 12 + 5 | 29 - 9 |
| 11 + 6 | 13 + 5 | 25 - 4 | 14 + 5 | 11 + 6 |
| 22 - 2 | 17 + 1 | 28 - 7 | 14 + 5 | 22 - 2 |
| 11 + 6 | 13 + 5 | 20 + 1 | 12 + 7 | 13 + 4 |
| 25 - 5 | 14 + 3 | 25 - 4 | 16 + 1 | 26 - 6 |

Blå [17]
Rosa [18]
Lilla [19]
Oransje [20]
Grønn [21]



Maihefte

2. Regn ut og fargelegg

| | | | | |
|----------|----------|----------|----------|----------|
| $29 - 5$ | $23 + 1$ | $29 - 4$ | $29 - 3$ | $28 - 1$ |
| $21 + 3$ | $22 + 2$ | $23 + 2$ | $23 + 3$ | $22 + 5$ |
| $29 - 5$ | $24 + 1$ | $29 - 3$ | $28 - 1$ | $23 + 1$ |
| $25 - 1$ | $25 - 1$ | $29 - 4$ | $23 + 3$ | $28 - 1$ |
| $21 + 3$ | $25 - 1$ | $22 + 3$ | $27 - 1$ | $21 + 6$ |

Blå [23]
Rosa [24]
Lilla [25]
Oransje [26]
Grønn [27]

| | | | | |
|---------|---------|---------|---------|---------|
| $3 + 2$ | $2 + 4$ | $7 - 1$ | $3 + 3$ | $7 - 1$ |
| $9 - 3$ | $7 - 2$ | $1 + 6$ | $3 + 4$ | $2 + 5$ |
| $1 + 5$ | $4 + 3$ | $2 + 3$ | $6 + 2$ | $6 + 2$ |
| $5 + 1$ | $3 + 4$ | $8 + 1$ | $6 - 1$ | $4 + 4$ |
| $9 - 3$ | $4 + 3$ | $2 + 7$ | $7 + 2$ | $1 + 4$ |

Blå [5]
Rosa [6]
Lilla [7]
Oransje [8]
Grønn [9]

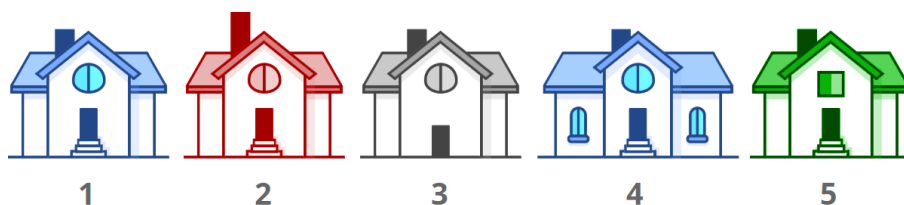
| | | | | |
|----------|----------|----------|----------|----------|
| $16 + 2$ | $12 + 6$ | $26 - 3$ | $13 + 6$ | $16 + 2$ |
| $16 + 2$ | $20 + 2$ | $14 + 5$ | $16 + 2$ | $12 + 6$ |
| $21 + 1$ | $16 + 3$ | $12 + 6$ | $13 + 5$ | $28 - 8$ |
| $16 + 3$ | $11 + 7$ | $15 + 3$ | $24 - 4$ | $29 - 8$ |
| $13 + 5$ | $13 + 5$ | $27 - 7$ | $20 + 1$ | $29 - 8$ |

Blå [18]
Rosa [19]
Lilla [20]
Oransje [21]
Grønn [22]



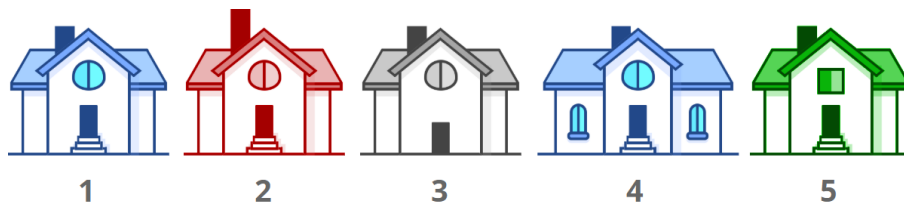
Maihefte

1. Gjett huset



Hvilken setning sier noe sikkert om hvor Simen bor? Sett strek under riktig svar.

- Simen bor i et blått hus.
- Simen bor i et hus med høy pipe.
- Simen bor i et hus med rundt vindu.



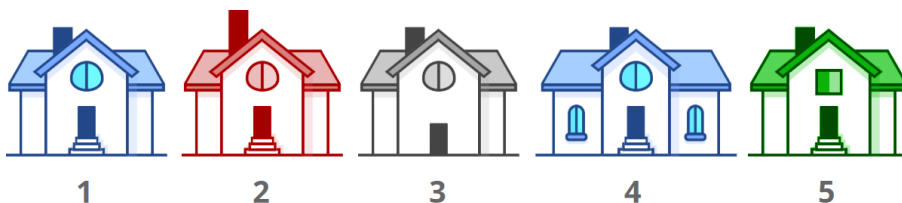
Hvilken setning sier noe sikkert om hvor Ella bor? Sett strek under riktig svar.

- Ella bor i et hus som ligger mellom to andre hus.
- Ella bor i et hus med trapp.
- Ella bor i et hus med firkantet vindu.



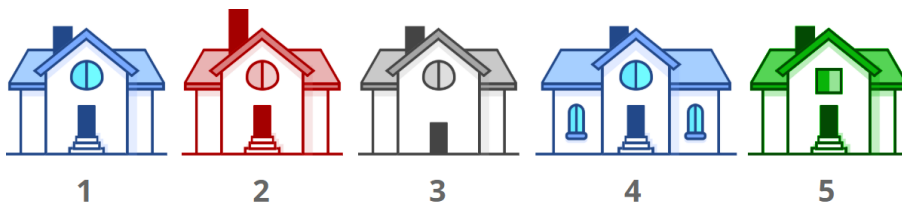
Maihefte

2. Gjett huset



I hvilket hus bor Steffen? Sett strek under riktig svar.

- Steffens bestevenner bor i de to første husene.
- Steffens hus har rundt vindu.
- Steffen bor ved siden av huset med flest vinduer.



Hvilken setning sier noe sikkert om hvor Linda bor? Sett strek under riktig svar.

- Linda bor i et hus med vindu.
- Linda bor i et hus med oddetall-nummer.
- Linda bor i det første huset.



Maihefte

1. Fullfør tallrekkene

| | | | | | |
|-------|-------|-------|-------|-------|-------|
| 30 | 33 | _____ | 39 | 42 | _____ |
| 5 | _____ | _____ | 11 | 13 | 15 |
| _____ | 25 | _____ | 29 | 31 | 33 |
| 17 | _____ | _____ | 26 | 29 | 32 |
| 38 | _____ | _____ | 44 | 46 | 48 |
| 25 | _____ | 27 | _____ | 29 | 30 |
| 39 | _____ | _____ | 45 | 47 | 49 |
| _____ | 14 | 15 | _____ | 17 | 18 |
| 40 | _____ | _____ | 46 | 48 | 50 |
| 34 | 37 | _____ | _____ | 46 | 49 |
| _____ | _____ | 46 | 47 | 48 | 49 |
| 27 | 28 | 29 | 30 | _____ | _____ |



Maihefte

2. Fullfør tallrekkene

| | | | | | |
|-------|-------|-------|-------|-------|-------|
| _____ | 30 | _____ | 32 | 33 | 34 |
| 4 | _____ | 10 | 13 | 16 | _____ |
| 34 | 37 | 40 | _____ | _____ | 49 |
| 25 | 27 | _____ | 31 | _____ | 35 |
| _____ | _____ | 39 | 41 | 43 | 45 |
| 28 | _____ | _____ | 37 | 40 | 43 |
| 28 | _____ | 32 | 34 | 36 | _____ |
| 33 | _____ | 39 | _____ | 45 | 48 |
| 25 | 28 | _____ | 34 | 37 | _____ |
| _____ | 20 | 21 | 22 | 23 | _____ |
| 17 | 19 | _____ | _____ | 25 | 27 |
| 38 | 39 | 40 | _____ | _____ | 43 |



Maihefte

1. Fyll inn tallene 1-9 i regnestykkene

| | | | | | | | | | | | |
|---|---|---|---|---|----|---|---|---|---|---|----|
| 1 | + | | - | | 5 | | + | | + | | 10 |
| + | | + | | - | | + | | + | | + | |
| 9 | - | | + | 2 | 5 | 3 | + | 2 | + | | 11 |
| - | | + | | + | | + | | + | | + | |
| | + | 8 | + | | 17 | | - | 7 | + | 9 | 10 |

| | | | | | | | | | |
|---|--|----|--|---|----|--|----|--|----|
| 6 | | 21 | | 6 | 12 | | 14 | | 19 |
|---|--|----|--|---|----|--|----|--|----|

| | | | | | | | | | | | |
|---|---|---|---|---|----|---|---|---|---|---|----|
| 6 | + | | + | | 15 | 4 | + | 6 | + | 7 | 17 |
| - | | + | | + | | - | | - | | - | |
| 5 | - | | + | | 6 | | + | 3 | + | | 6 |
| + | | + | | + | | + | | + | | + | |
| | + | 7 | + | 9 | 20 | | + | | + | | 22 |

| | | | | | | | | | |
|---|--|----|--|----|----|--|---|--|----|
| 5 | | 10 | | 20 | 10 | | 8 | | 15 |
|---|--|----|--|----|----|--|---|--|----|

| | | | | | | | | | | | |
|---|---|---|---|---|---|---|---|---|---|---|----|
| | - | | + | 3 | 4 | | + | | + | 2 | 7 |
| + | | + | | + | | - | | + | | + | |
| 8 | - | 4 | + | 5 | 9 | | + | 7 | + | | 19 |
| + | | + | | + | | + | | + | | - | |
| | + | | - | | 8 | 6 | + | | + | 5 | 19 |

| | | | | | | | | | |
|----|--|----|--|----|---|--|----|--|---|
| 16 | | 14 | | 15 | 7 | | 16 | | 6 |
|----|--|----|--|----|---|--|----|--|---|



Maihefte

2. Fyll inn tallene 1-9 i regnestykkene

| | | | | | |
|---|---|---|---|---|----|
| 1 | + | | - | 2 | 8 |
| + | | - | | + | |
| | + | 6 | + | | 18 |
| + | | + | | + | |
| | + | 7 | + | | 15 |

12 10 11

| | | | | | |
|---|---|---|---|---|----|
| 6 | - | | + | 4 | 8 |
| + | | + | | - | |
| | + | | - | 1 | 10 |
| + | | - | | + | |
| | + | 5 | + | | 21 |

16 5 12

| | | | | | |
|---|---|---|---|---|----|
| 4 | + | | - | | 5 |
| - | | + | | + | |
| 1 | + | 6 | + | 5 | 12 |
| + | | + | | + | |
| | - | | + | | 10 |

12 16 15

| | | | | | |
|---|---|---|---|---|----|
| | - | 1 | + | | 10 |
| - | | + | | + | |
| 4 | - | | + | | 7 |
| + | | + | | + | |
| 5 | + | | - | 7 | 6 |

10 12 15

| | | | | | |
|---|---|---|---|---|----|
| 4 | - | 2 | + | 5 | 7 |
| - | | + | | + | |
| | + | | - | | 3 |
| + | | + | | - | |
| | + | | + | 3 | 19 |

10 19 8

| | | | | | |
|---|---|---|---|---|----|
| 7 | + | | - | | 8 |
| + | | + | | + | |
| | + | 4 | + | 6 | 19 |
| + | | + | | + | |
| | + | 5 | + | | 16 |

19 11 15



Maihefte

1. Standardalgoritme

$$\begin{array}{r} 34 \\ - \quad 1 \\ \hline = \end{array}$$

$$\begin{array}{r} 29 \\ - \quad 1 \\ \hline = \end{array}$$

$$\begin{array}{r} 38 \\ - \quad 8 \\ \hline = \end{array}$$

$$\begin{array}{r} 46 \\ - \quad 3 \\ \hline = \end{array}$$

$$\begin{array}{r} \quad 7 \\ - \quad 2 \\ \hline = \end{array}$$

$$\begin{array}{r} 19 \\ - \quad 7 \\ \hline = \end{array}$$

$$\begin{array}{r} 37 \\ - \quad 3 \\ \hline = \end{array}$$

$$\begin{array}{r} 34 \\ - \quad 1 \\ \hline = \end{array}$$

$$\begin{array}{r} 16 \\ - \quad 1 \\ \hline = \end{array}$$

$$\begin{array}{r} 32 \\ - \quad 1 \\ \hline = \end{array}$$

$$\begin{array}{r} 31 \\ - \quad 1 \\ \hline = \end{array}$$

$$\begin{array}{r} 47 \\ - \quad 3 \\ \hline = \end{array}$$

$$\begin{array}{r} 16 \\ - \quad 2 \\ \hline = \end{array}$$

$$\begin{array}{r} \quad 9 \\ - \quad 9 \\ \hline = \end{array}$$

$$\begin{array}{r} 45 \\ - \quad 0 \\ \hline = \end{array}$$

$$\begin{array}{r} 48 \\ - \quad 7 \\ \hline = \end{array}$$

$$\begin{array}{r} \quad 8 \\ - \quad 8 \\ \hline = \end{array}$$

$$\begin{array}{r} 43 \\ - \quad 0 \\ \hline = \end{array}$$

$$\begin{array}{r} 47 \\ - \quad 1 \\ \hline = \end{array}$$

$$\begin{array}{r} 43 \\ - \quad 0 \\ \hline = \end{array}$$

$$\begin{array}{r} 47 \\ - \quad 1 \\ \hline = \end{array}$$

$$\begin{array}{r} 18 \\ - \quad 2 \\ \hline = \end{array}$$

$$\begin{array}{r} 45 \\ - \quad 0 \\ \hline = \end{array}$$

$$\begin{array}{r} \quad 3 \\ - \quad 1 \\ \hline = \end{array}$$



Maihefte

2. Regn ut

$36 - 10 = \underline{\quad}$

$\underline{\quad} = 45 - 44$

$26 - 18 = \underline{\quad}$

$49 - 34 = \underline{\quad}$

$\underline{\quad} = 49 - 21$

$\underline{\quad} = 49 - 9$

$28 - 19 = \underline{\quad}$

$\underline{\quad} = 42 - 31$

$45 - 8 = \underline{\quad}$

$\underline{\quad} = 43 - 14$

$43 - 17 = \underline{\quad}$

$23 - 12 = \underline{\quad}$

$14 - 6 = \underline{\quad}$

$44 - 30 = \underline{\quad}$

$\underline{\quad} = 39 - 17$

$\underline{\quad} = 49 - 34$

$\underline{\quad} = 35 - 32$

$\underline{\quad} = 43 - 12$

$30 - 15 = \underline{\quad}$

$\underline{\quad} = 52 - 40$

$\underline{\quad} = 42 - 6$

$\underline{\quad} = 57 - 30$

$\underline{\quad} = 48 - 25$

$48 - 5 = \underline{\quad}$

$19 - 18 = \underline{\quad}$

$\underline{\quad} = 28 - 26$

$\underline{\quad} = 44 - 19$

$39 - 22 = \underline{\quad}$

$\underline{\quad} = 28 - 22$

$\underline{\quad} = 39 - 28$

$42 - 7 = \underline{\quad}$

$\underline{\quad} = 42 - 6$

$\underline{\quad} = 42 - 7$

$\underline{\quad} = 45 - 35$

$34 - 30 = \underline{\quad}$

$19 - 14 = \underline{\quad}$

$\underline{\quad} = 8 - 5$

$\underline{\quad} = 35 - 24$

$\underline{\quad} = 37 - 26$

$47 - 31 = \underline{\quad}$

$33 - 9 = \underline{\quad}$

$\underline{\quad} = 17 - 12$



Maihefte

1. Standardalgoritme

$$\begin{array}{r} 194 \\ - 132 \\ \hline = \end{array}$$

$$\begin{array}{r} 473 \\ - 315 \\ \hline = \end{array}$$

$$\begin{array}{r} 947 \\ - 312 \\ \hline = \end{array}$$

$$\begin{array}{r} 730 \\ - 170 \\ \hline = \end{array}$$

$$\begin{array}{r} 463 \\ - 243 \\ \hline = \end{array}$$

$$\begin{array}{r} 593 \\ - 230 \\ \hline = \end{array}$$

$$\begin{array}{r} 825 \\ - 415 \\ \hline = \end{array}$$

$$\begin{array}{r} 865 \\ - \quad 16 \\ \hline = \end{array}$$

$$\begin{array}{r} 160 \\ - 103 \\ \hline = \end{array}$$

$$\begin{array}{r} 908 \\ - 581 \\ \hline = \end{array}$$

$$\begin{array}{r} 315 \\ - 250 \\ \hline = \end{array}$$

$$\begin{array}{r} 311 \\ - 112 \\ \hline = \end{array}$$

$$\begin{array}{r} 327 \\ - 142 \\ \hline = \end{array}$$

$$\begin{array}{r} 946 \\ - 309 \\ \hline = \end{array}$$

$$\begin{array}{r} 775 \\ - 121 \\ \hline = \end{array}$$

$$\begin{array}{r} 835 \\ - 789 \\ \hline = \end{array}$$

$$\begin{array}{r} 947 \\ - 763 \\ \hline = \end{array}$$

$$\begin{array}{r} 720 \\ - 645 \\ \hline = \end{array}$$



Maihefte

2. Regn ut

$91 - 6 = \underline{\quad}$

$70 - \underline{\quad} = 9$

$89 - \underline{\quad} = 20$

$51 = 74 - \underline{\quad}$

$96 - \underline{\quad} = 33$

$34 = 85 - \underline{\quad}$

$100 - 77 = \underline{\quad}$

$17 = \underline{\quad} - 24$

$5 = \underline{\quad} - 85$

$55 = \underline{\quad} - 35$

$61 - \underline{\quad} = 19$

$\underline{\quad} = 30 - 24$

$3 = \underline{\quad} - 54$

$\underline{\quad} = 74 - 11$

$73 - 37 = \underline{\quad}$

$99 - 55 = \underline{\quad}$

$68 - 11 = \underline{\quad}$

$\underline{\quad} = 90 - 61$

$16 = 62 - \underline{\quad}$

$95 - \underline{\quad} = 62$

$28 = \underline{\quad} - 38$

$22 = 72 - \underline{\quad}$

$31 = \underline{\quad} - 27$

$\underline{\quad} = 48 - 26$

$31 = \underline{\quad} - 40$

$41 = 55 - \underline{\quad}$

$72 = \underline{\quad} - 21$

$61 - 28 = \underline{\quad}$

$63 = 86 - \underline{\quad}$

$47 - \underline{\quad} = 6$

$4 = 28 - \underline{\quad}$

$63 - \underline{\quad} = 31$

$96 - \underline{\quad} = 58$

$\underline{\quad} = 37 - 15$

$36 = \underline{\quad} - 57$

$\underline{\quad} = 96 - 46$

$95 - 29 = \underline{\quad}$

$66 - 32 = \underline{\quad}$

$92 - 67 = \underline{\quad}$

$\underline{\quad} = 76 - 44$

$41 = 69 - \underline{\quad}$

$94 - \underline{\quad} = 12$



Maihefte

1. Regn ut

$33 = \underline{\quad} - 407$

$154 = \underline{\quad} - 262$

$418 - \underline{\quad} = 334$

$162 = 487 - \underline{\quad}$

$445 - 430 = \underline{\quad}$

$340 - 236 = \underline{\quad}$

$49 = \underline{\quad} - 69$

$15 = 287 - \underline{\quad}$

$156 - \underline{\quad} = 98$

$63 = 126 - \underline{\quad}$

$498 - \underline{\quad} = 135$

$54 = 381 - \underline{\quad}$

$485 - 384 = \underline{\quad}$

$223 - 152 = \underline{\quad}$

$290 = 437 - \underline{\quad}$

$\underline{\quad} = 470 - 66$

$\underline{\quad} = 368 - 69$

$122 - 115 = \underline{\quad}$

$\underline{\quad} = 423 - 12$

$465 = 476 - \underline{\quad}$

$50 = 477 - \underline{\quad}$

$70 = \underline{\quad} - 301$

$176 = \underline{\quad} - 152$

$185 - \underline{\quad} = 170$

$97 = \underline{\quad} - 281$

$113 = 457 - \underline{\quad}$

$165 - \underline{\quad} = 114$

$208 = \underline{\quad} - 162$

$66 - \underline{\quad} = 55$

$55 - \underline{\quad} = 15$

$429 - \underline{\quad} = 283$

$179 = \underline{\quad} - 167$

$444 - \underline{\quad} = 244$

$434 - \underline{\quad} = 414$

$331 - 271 = \underline{\quad}$

$335 - 114 = \underline{\quad}$

$167 - 121 = \underline{\quad}$

$161 = 438 - \underline{\quad}$

$218 = \underline{\quad} - 257$

$299 - \underline{\quad} = 70$

$468 - \underline{\quad} = 199$

$229 = 310 - \underline{\quad}$



Maihefte

2. Standardalgoritme

$$\begin{array}{r} 264 \\ - 169 \\ \hline = \end{array}$$

$$\begin{array}{r} 883 \\ - 631 \\ \hline = \end{array}$$

$$\begin{array}{r} 125 \\ - 100 \\ \hline = \end{array}$$

$$\begin{array}{r} 500 \\ - 183 \\ \hline = \end{array}$$

$$\begin{array}{r} 79 \\ - 41 \\ \hline = \end{array}$$

$$\begin{array}{r} 819 \\ - 815 \\ \hline = \end{array}$$

$$\begin{array}{r} 353 \\ - 332 \\ \hline = \end{array}$$

$$\begin{array}{r} 713 \\ - 313 \\ \hline = \end{array}$$

$$\begin{array}{r} 891 \\ - 627 \\ \hline = \end{array}$$

$$\begin{array}{r} 778 \\ - 320 \\ \hline = \end{array}$$

$$\begin{array}{r} 366 \\ - \quad 64 \\ \hline = \end{array}$$

$$\begin{array}{r} 781 \\ - 362 \\ \hline = \end{array}$$

$$\begin{array}{r} 920 \\ - 685 \\ \hline = \end{array}$$

$$\begin{array}{r} 306 \\ - 272 \\ \hline = \end{array}$$

$$\begin{array}{r} 284 \\ - \quad 40 \\ \hline = \end{array}$$

$$\begin{array}{r} 468 \\ - 220 \\ \hline = \end{array}$$

$$\begin{array}{r} 332 \\ - \quad 58 \\ \hline = \end{array}$$

$$\begin{array}{r} 982 \\ - 545 \\ \hline = \end{array}$$



Maihefte

1. Standardalgoritme

$$\begin{array}{r} 667 \\ - \quad 31 \\ \hline = \end{array}$$

$$\begin{array}{r} 645 \\ - \quad 77 \\ \hline = \end{array}$$

$$\begin{array}{r} 751 \\ - 460 \\ \hline = \end{array}$$

$$\begin{array}{r} 823 \\ - 571 \\ \hline = \end{array}$$

$$\begin{array}{r} 671 \\ - 501 \\ \hline = \end{array}$$

$$\begin{array}{r} 446 \\ - 411 \\ \hline = \end{array}$$

$$\begin{array}{r} 676 \\ - \quad 75 \\ \hline = \end{array}$$

$$\begin{array}{r} 723 \\ - 293 \\ \hline = \end{array}$$

$$\begin{array}{r} 709 \\ - 533 \\ \hline = \end{array}$$

$$\begin{array}{r} 138 \\ - \quad 95 \\ \hline = \end{array}$$

$$\begin{array}{r} 795 \\ - 330 \\ \hline = \end{array}$$

$$\begin{array}{r} 979 \\ - 183 \\ \hline = \end{array}$$

$$\begin{array}{r} 981 \\ - 871 \\ \hline = \end{array}$$

$$\begin{array}{r} 582 \\ - 192 \\ \hline = \end{array}$$

$$\begin{array}{r} 911 \\ - 265 \\ \hline = \end{array}$$

$$\begin{array}{r} 976 \\ - 523 \\ \hline = \end{array}$$

$$\begin{array}{r} 987 \\ - 387 \\ \hline = \end{array}$$

$$\begin{array}{r} 835 \\ - 188 \\ \hline = \end{array}$$



Maihefte

2. Standardalgoritme

$$\begin{array}{r} 732 \\ - 279 \\ \hline = \end{array}$$

$$\begin{array}{r} 422 \\ - \quad 36 \\ \hline = \end{array}$$

$$\begin{array}{r} 792 \\ - \quad 72 \\ \hline = \end{array}$$

$$\begin{array}{r} 800 \\ - 547 \\ \hline = \end{array}$$

$$\begin{array}{r} 952 \\ - 532 \\ \hline = \end{array}$$

$$\begin{array}{r} 324 \\ - 121 \\ \hline = \end{array}$$

$$\begin{array}{r} 328 \\ - 209 \\ \hline = \end{array}$$

$$\begin{array}{r} 757 \\ - 431 \\ \hline = \end{array}$$

$$\begin{array}{r} 600 \\ - 126 \\ \hline = \end{array}$$

$$\begin{array}{r} 788 \\ - 559 \\ \hline = \end{array}$$

$$\begin{array}{r} 498 \\ - 463 \\ \hline = \end{array}$$

$$\begin{array}{r} 689 \\ - 400 \\ \hline = \end{array}$$

$$\begin{array}{r} 982 \\ - 356 \\ \hline = \end{array}$$

$$\begin{array}{r} 713 \\ - 466 \\ \hline = \end{array}$$

$$\begin{array}{r} 62 \\ - 33 \\ \hline = \end{array}$$

$$\begin{array}{r} 701 \\ - \quad 16 \\ \hline = \end{array}$$

$$\begin{array}{r} 843 \\ - 810 \\ \hline = \end{array}$$

$$\begin{array}{r} 804 \\ - 378 \\ \hline = \end{array}$$



Maihefte

1. Standardalgoritme

| | | | | |
|---|---|---|---|---|
| | 4 | 1 | 1 | 6 |
| - | | 2 | 8 | 5 |
| = | | | | |

| | | | | |
|---|---|---|---|---|
| | 7 | 0 | 4 | 7 |
| - | 3 | 7 | 4 | 0 |
| = | | | | |

| | | | | |
|---|---|---|---|---|
| | 3 | 3 | 1 | 1 |
| - | 2 | 3 | 9 | 1 |
| = | | | | |

| | | | | |
|---|---|---|---|---|
| | 5 | 9 | 7 | 7 |
| - | 1 | 5 | 3 | 6 |
| = | | | | |

| | | | | |
|---|---|---|---|---|
| | 7 | 8 | 2 | 9 |
| - | 4 | 8 | 7 | 5 |
| = | | | | |

| | | | | |
|---|---|---|---|---|
| | 6 | 5 | 9 | 8 |
| - | 6 | 1 | 3 | 9 |
| = | | | | |

| | | | | |
|---|---|---|---|---|
| | 6 | 1 | 1 | 4 |
| - | 1 | 1 | 9 | 8 |
| = | | | | |

| | | | | |
|---|---|---|---|---|
| | 4 | 6 | 6 | 2 |
| - | | 4 | 4 | 1 |
| = | | | | |

| | | | | |
|---|---|---|---|---|
| | 1 | 8 | 4 | 1 |
| - | 1 | 0 | 4 | 9 |
| = | | | | |

| | | | | |
|---|---|---|---|---|
| | 2 | 4 | 8 | 0 |
| - | | 2 | 7 | 7 |
| = | | | | |

| | | | | |
|---|---|---|---|---|
| | 5 | 6 | 1 | 5 |
| - | 5 | 3 | 9 | 8 |
| = | | | | |

| | | | | |
|---|---|---|---|---|
| | 5 | 6 | 8 | 1 |
| - | 2 | 2 | 6 | 1 |
| = | | | | |

| | | | | |
|---|---|---|---|---|
| | 9 | 8 | 4 | 1 |
| - | 9 | 1 | 4 | 3 |
| = | | | | |

| | | | | |
|---|---|---|---|---|
| | 2 | 8 | 4 | 4 |
| - | | 8 | 0 | 7 |
| = | | | | |

| | | | | |
|---|---|---|---|---|
| | 9 | 6 | 7 | 4 |
| - | 9 | 0 | 3 | 0 |
| = | | | | |

| | | | | |
|---|---|---|---|---|
| | 4 | 8 | 6 | 2 |
| - | | 6 | 8 | 2 |
| = | | | | |

| | | | | |
|---|---|---|---|---|
| | 8 | 3 | 1 | 8 |
| - | 7 | 7 | 0 | 7 |
| = | | | | |

| | | | | |
|---|---|---|---|---|
| | 7 | 9 | 3 | 8 |
| - | 6 | 9 | 8 | 6 |
| = | | | | |



Maihefte

2. Regn ut

$$\underline{\quad} = 435 - 154$$

$$\underline{\quad} = 681 - 672$$

$$959 - \underline{\quad} = 476$$

$$915 - \underline{\quad} = 61$$

$$\underline{\quad} = 296 - 72$$

$$384 = 849 - \underline{\quad}$$

$$172 = \underline{\quad} - 534$$

$$396 - 280 = \underline{\quad}$$

$$322 - 60 = \underline{\quad}$$

$$384 - \underline{\quad} = 302$$

$$\underline{\quad} = 809 - 677$$

$$\underline{\quad} = 884 - 778$$

$$324 = 560 - \underline{\quad}$$

$$790 - \underline{\quad} = 400$$

$$455 = 659 - \underline{\quad}$$

$$\underline{\quad} = 250 - 133$$

$$470 - 199 = \underline{\quad}$$

$$794 - \underline{\quad} = 556$$

$$453 - \underline{\quad} = 438$$

$$375 - \underline{\quad} = 315$$

$$796 - \underline{\quad} = 12$$

$$571 = \underline{\quad} - 166$$

$$667 - \underline{\quad} = 142$$

$$950 - \underline{\quad} = 559$$

$$664 = \underline{\quad} - 192$$

$$21 = 929 - \underline{\quad}$$

$$729 - \underline{\quad} = 87$$

$$527 - 63 = \underline{\quad}$$

$$738 - 511 = \underline{\quad}$$

$$654 - \underline{\quad} = 552$$

$$680 - \underline{\quad} = 35$$

$$550 = \underline{\quad} - 204$$

$$\underline{\quad} = 828 - 31$$

$$\underline{\quad} = 851 - 829$$

$$\underline{\quad} = 346 - 149$$

$$418 = 581 - \underline{\quad}$$

$$170 = \underline{\quad} - 437$$

$$\underline{\quad} = 997 - 257$$

$$928 - \underline{\quad} = 796$$

$$655 - \underline{\quad} = 409$$

$$106 - 48 = \underline{\quad}$$

$$413 - \underline{\quad} = 149$$

